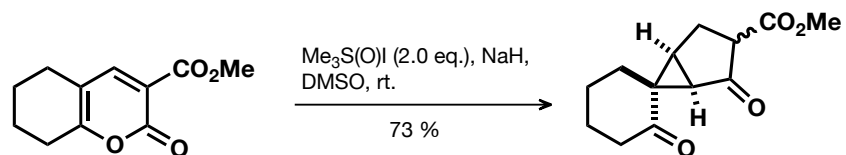


1. Assign a probable mechanism to the following transformation including an explanation for the stereochemical outcome.

Org. Lett. **2012**, *14*, 6048.

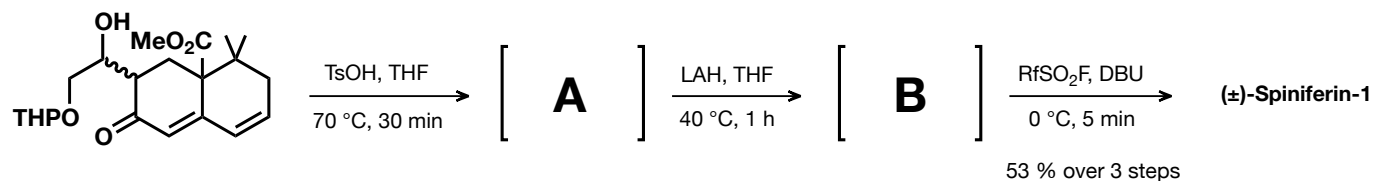
☆☆☆



2. Explain the outcome of the reaction (synthesis of (\pm)-Spiniferin-1). Which special features has the natural product?

J. Org. Chem. **2011**, *76*, 1495.

☆☆☆

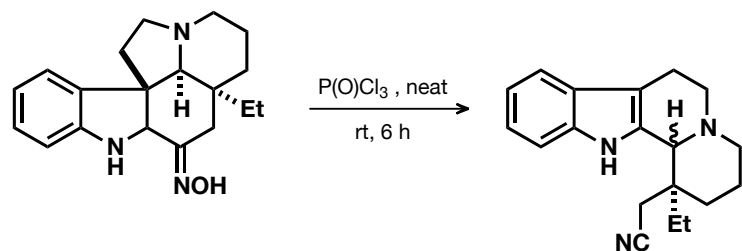


5*H*-3-oxa-octafluoropentanesulfonyl fluoride ($\text{RfSO}_2\text{F} = \text{HCF}_2\text{CF}_2\text{OCF}_2\text{CF}_2\text{SO}_2\text{F}$): *Tet. Lett.* **2009**, *50*, 2727.

3. Mechanism for this transformation?

Tet. Lett. **1974**, *15*, 1597.

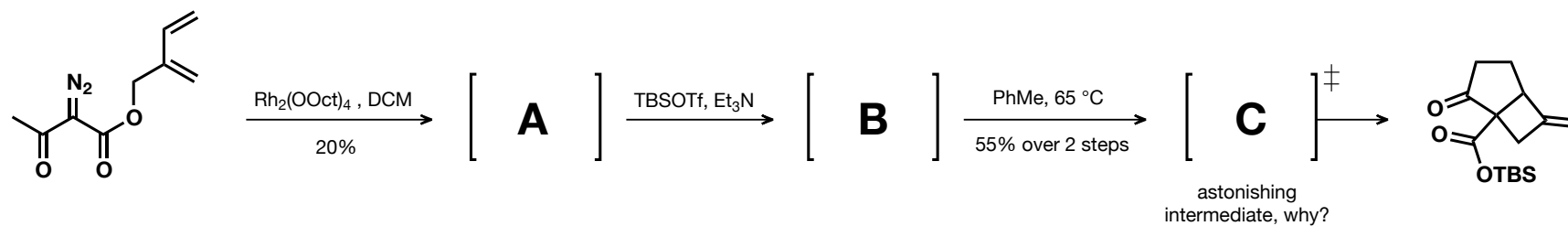
☆☆☆



4. Assign a probable mechanism to the following transformation.

J. Org. Chem. **2000**, *65*, 4261.

☆☆☆



5. Assign a probable mechanism to the following transformation.

J. Am. Chem. Soc., **1995**, *117*, 10413.

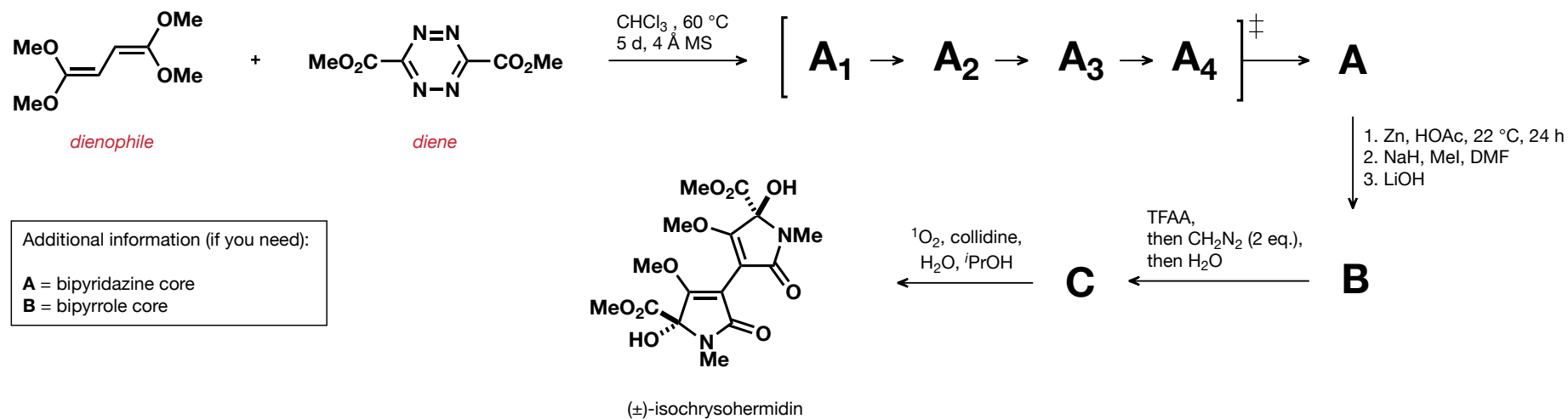
☆☆☆



6. Total Synthesis of Isochrysohermidin (enjoy Diels–Alder reactions)

Boger, *J. Am. Chem. Soc.* **1993**, *115*, 11418.

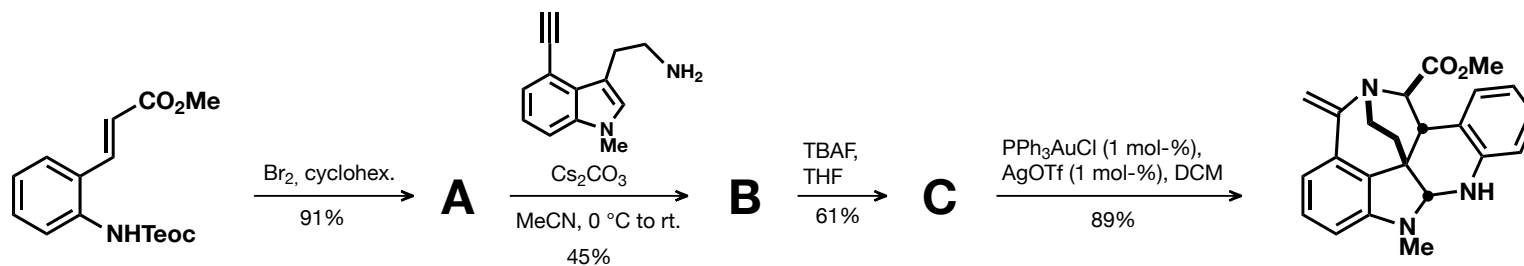
☆☆☆



7. Assign a probable mechanism to the following transformation.

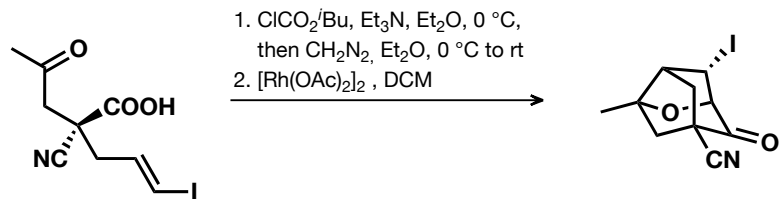
Funk, *Org. Lett.*, **2006**, *8*, 3995.

☆☆☆



Additional problem sets:

A1. Draw a mechanism for the formation of the tricyclic compound.



Lee, *Angew. Chem. Int. Ed.*, **2008**, 47, 4009.

